

Final Review



A PRACTICING MAP SKILLS

Use the political map **Europe: Political** on the next page to answer these questions.

1. Match each country with its capital city.

- | | |
|-------------------|---------------------|
| _____ Sweden | a. Paris |
| _____ Spain | b. Bern |
| _____ France | c. Stockholm |
| _____ Romania | d. Bucharest |
| _____ Switzerland | e. Madrid |

2. Match each city below with its absolute location.

- | | |
|------------------------------|----------------------|
| _____ Belgrade, Yugoslavia | a. 59°N, 11°E |
| _____ Oslo, Norway | b. 64°N, 22°W |
| _____ Prague, Czech Republic | c. 54°N, 27°E |
| _____ Minsk, Belarus | d. 44°N, 21°E |
| _____ Reykjavík, Iceland | e. 51°N, 13°E |

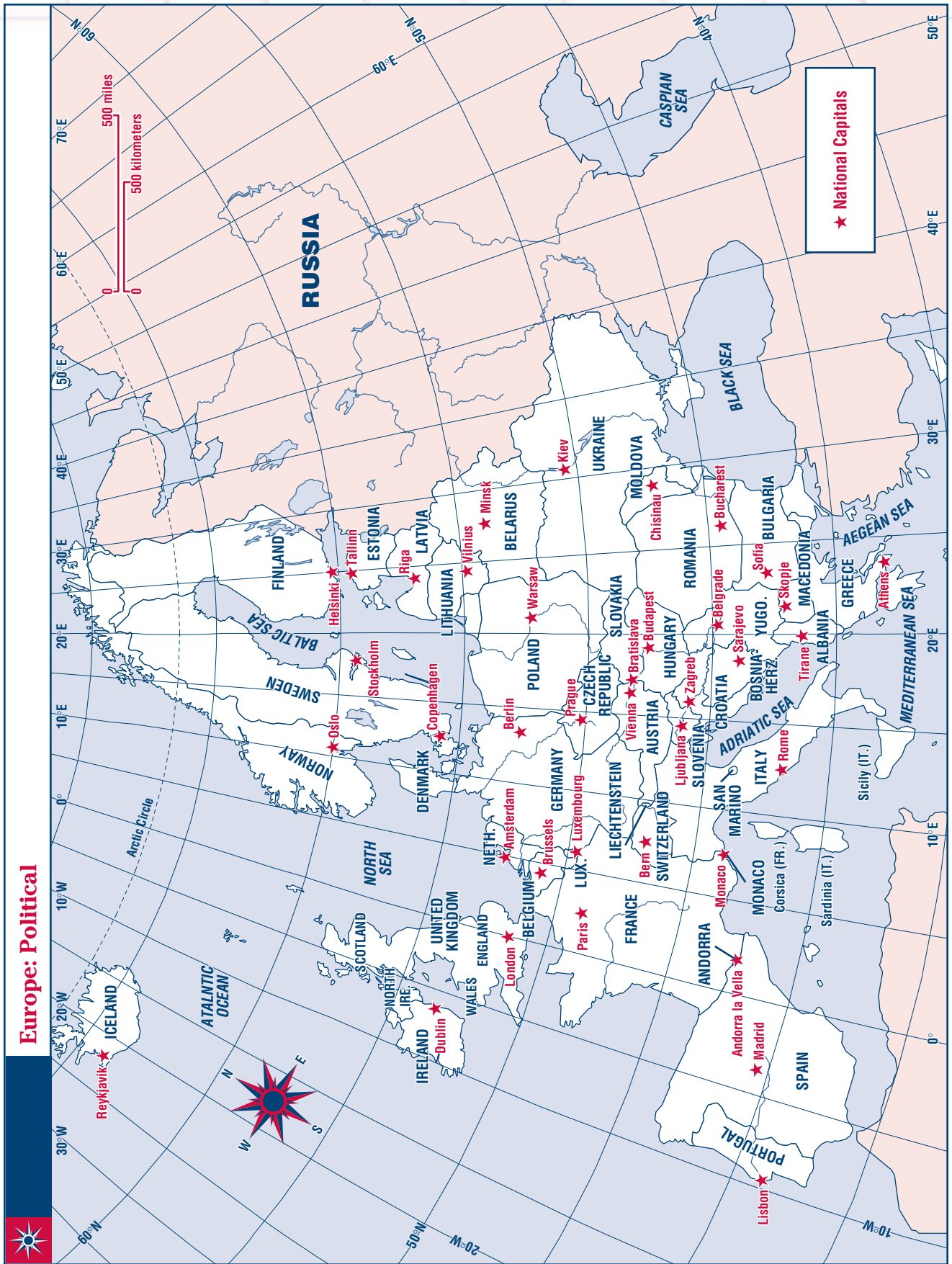
3. About how far is it in miles between each pair of cities listed below?

- | | | |
|--|---------------------|-----------------------|
| _____ Lisbon, Portugal, to Madrid, Spain | a. 250 miles | b. 500 miles |
| _____ Bern, Switzerland, to Belgrade, Yugoslavia | a. 300 miles | b. 500 miles |
| _____ Berlin, Germany, to Rome, Italy | a. 600 miles | b. 1,000 miles |

4. In what direction would you travel on each trip below?

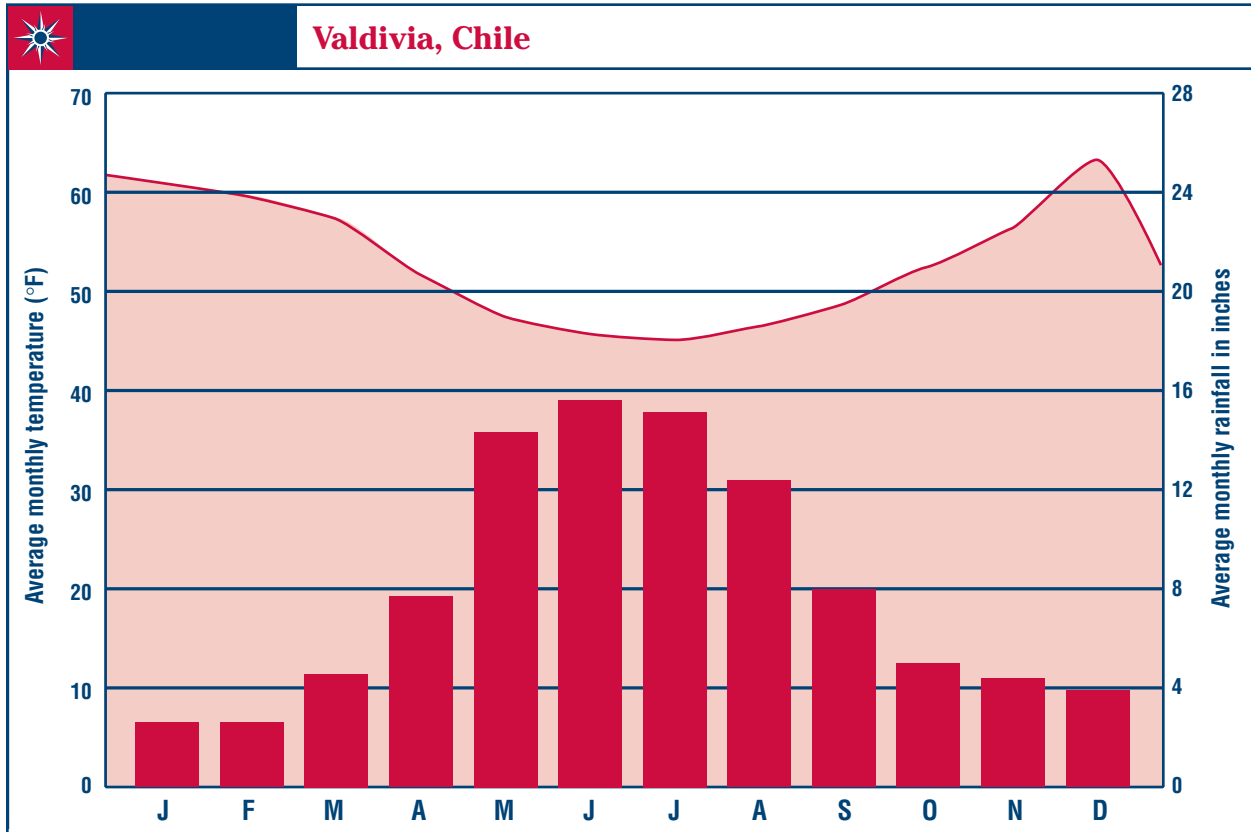
- | | | | | |
|--|---------------------|---------------------|---------------------|---------------------|
| _____ from Sofia, Bulgaria, to Helsinki, Finland | a. north | b. south | c. east | d. west |
| _____ from Vienna, Austria, to Zagreb, Croatia | a. north | b. south | c. east | d. west |
| _____ from Oslo, Norway, to Warsaw, Poland | a. northeast | b. southeast | c. southwest | d. northwest |

Europe: Political



B USING GRAPHICS

Use the climograph of **Valdivia, Chile**, below to answer these questions.



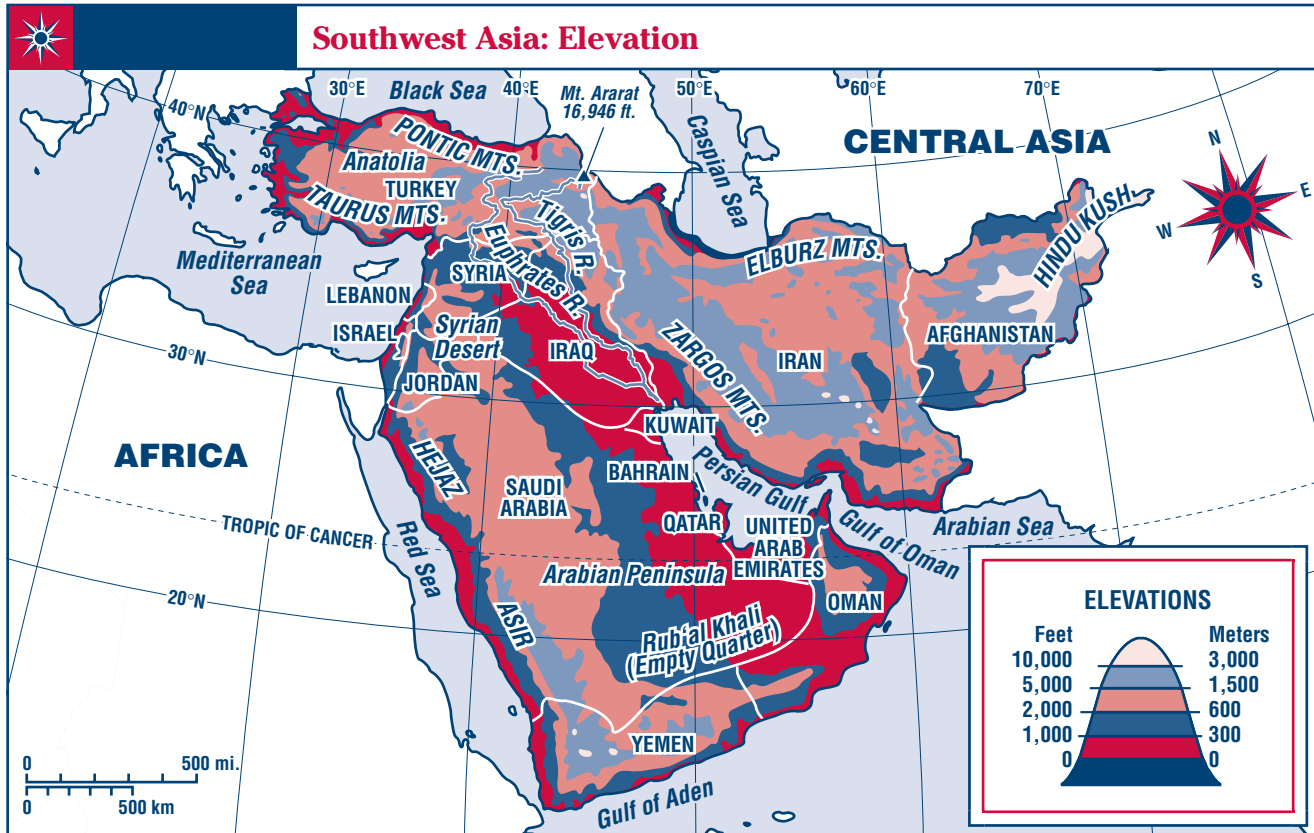
Source: www.worldclimate.com.

1. In what month(s) does the most rain fall in Valdivia? _____
2. In what month(s) does the least amount of rain fall in Valdivia?

3. What is the average monthly temperature for November in Valdivia? _____
4. What month has the highest average monthly temperature? _____
the lowest average monthly temperature? _____
5. Which months of the year are part of the rainy season in Valdivia?

C PRACTICING MAP SKILLS

Use the elevation map **Southwest Asia: Elevation** below to answer these questions.



1. Find Antolia on the map. What is its elevation?

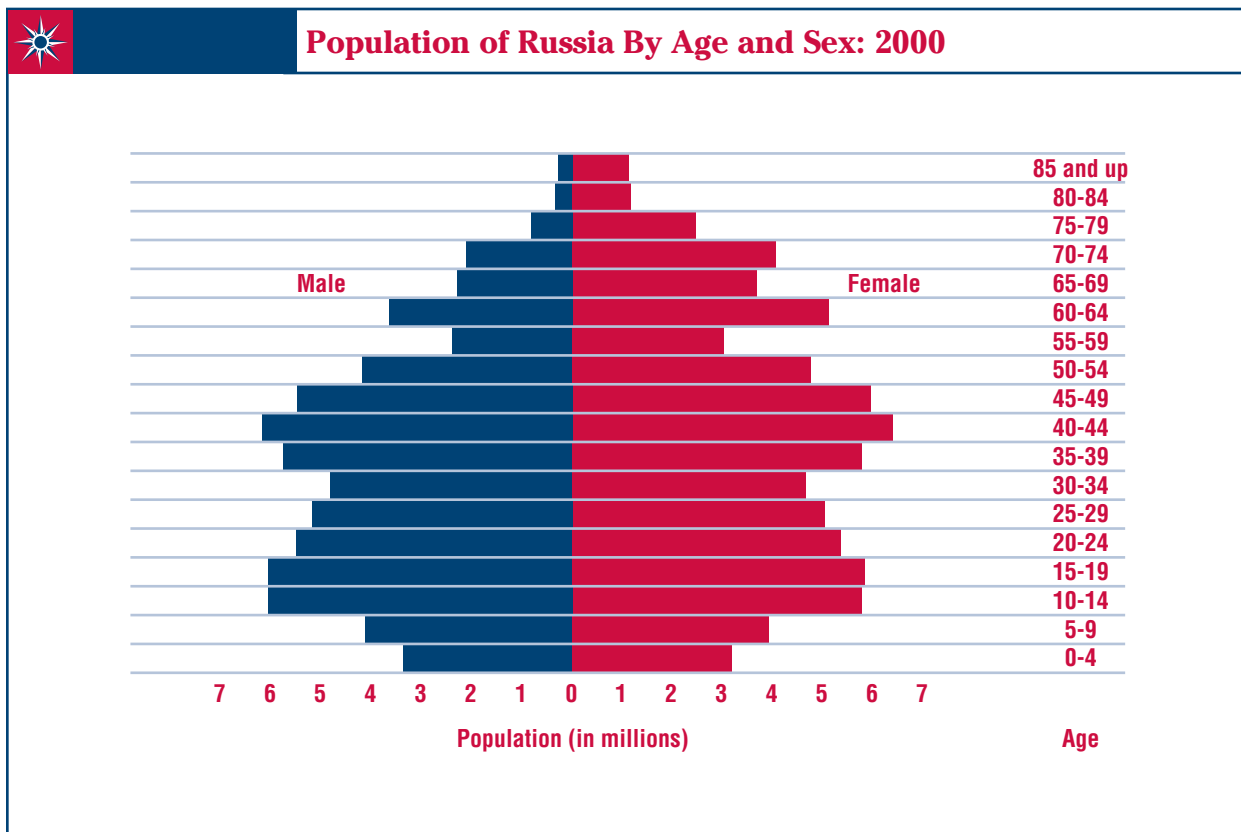
2. Which area of the map has an elevation over 10,000 feet?

3. One area on the map has an elevation below sea level.
Give the absolute location of that area. _____
4. What is the elevation of the Rub' al Khali?

5. At what elevation does most of the country of Iraq lie?

D USING GRAPHICS

Use the population pyramid **Population of Russia By Age and Sex, 2000** below to answer these questions.



Source: U.S. Census Bureau, International Data Base, 2000.

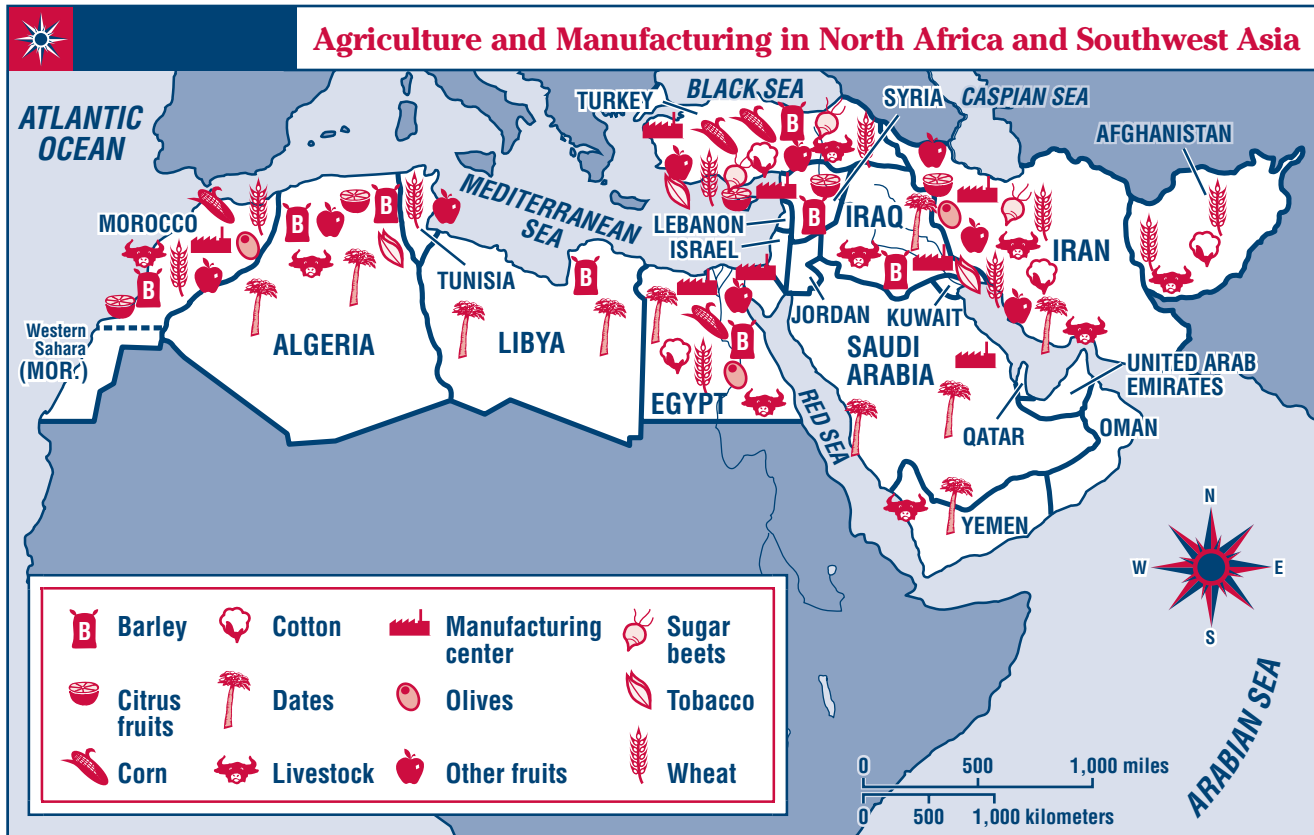
1. What age group in Russia has the largest number of people?

2. What age group in Russia has the smallest number of people?

3. Will the population of Russia most likely grow faster or slower when the people now in the age groups 0 to 4 and 5 to 9 reach the age to have children? Why?

E PRACTICING MAP SKILLS

Use the resource map **Agriculture and Manufacturing in North Africa and Southwest Asia** below to answer these questions.



1. What crops are grown in Libya? In Egypt?

2. In which countries is raising livestock an agricultural activity?

3. Which countries have manufacturing centers located along the Mediterranean Sea?

4. Which countries have the most diverse agricultural activities?

5. Which countries have no major agricultural or manufacturing activities?
